

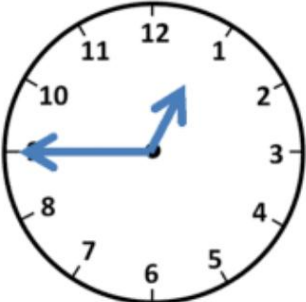
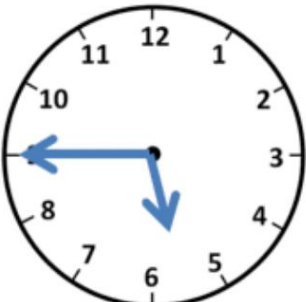
SAATLERİ EŐLEŐTİR

Saatleri rnekteki gibi eŐleŐtirelim.

	On biri eyrek geiyor	5:15
	Sekizi eyrek geiyor	1:15
	Biri eyrek geiyor	11:15
	On ikiyi eyrek geiyor	8:15
	BeŐi eyrek geiyor	12:15

SAATLERİ EŐLEŐTİR

Saatleri rnekteki gibi eŐleŐtirelim.

	Altıya eyrek var	5:45
	Bire eyrek var	4:45
	BeŐe eyrek var	10:45
	On bire eyrek var	6:45
	Yediye eyrek var	12:45

SAATLERİ EŐLEŐTİR

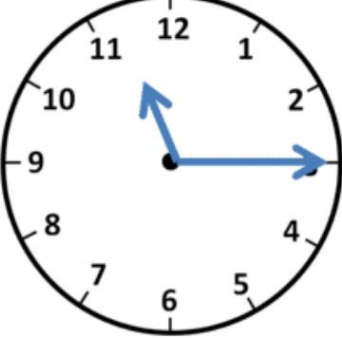
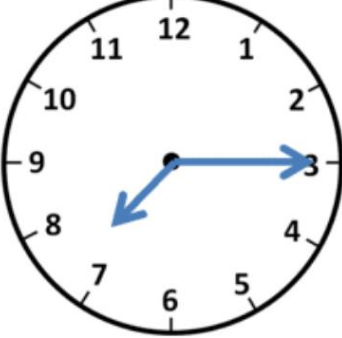
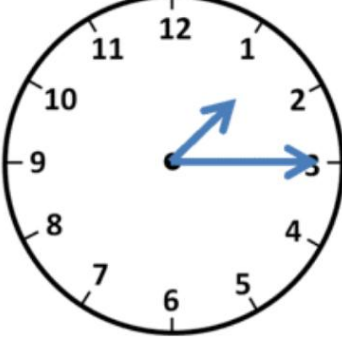
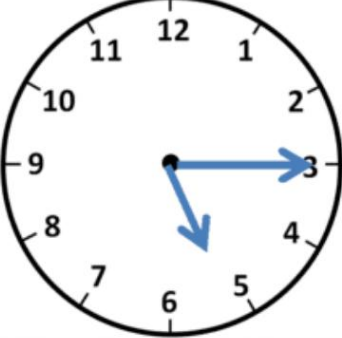
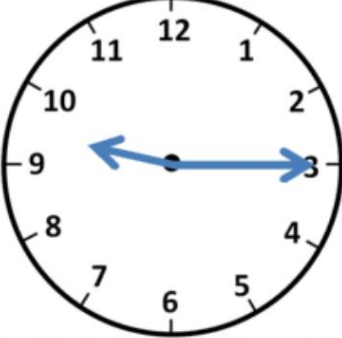
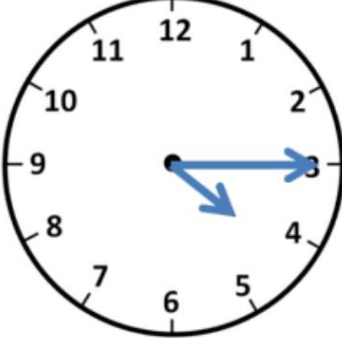
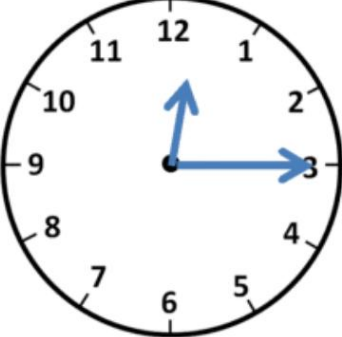
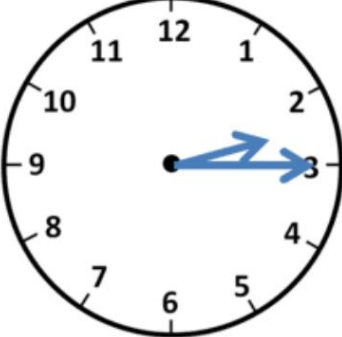
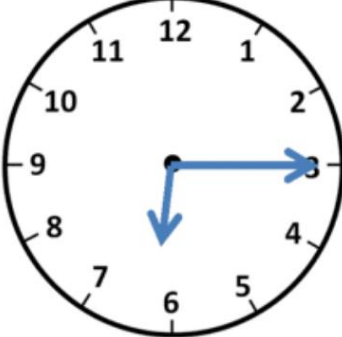
Saatleri rnekteki gibi eŐleŐtirelim

	Drde eyrek var	8:15
	Sekizi eyrek geiyor	3:45
	On bire eyrek var	10:45
	Bire eyrek var	5:15
	BeŐi eyrek geiyor	12:45

ÇEYREK GEÇİYOR

Örneğe göre boşlukları dolduralım

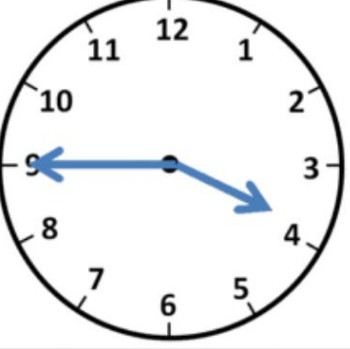
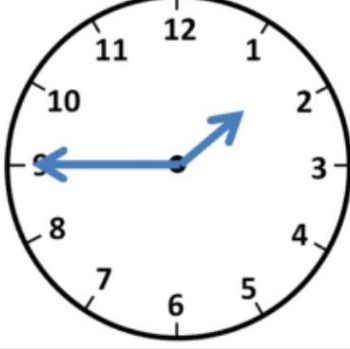
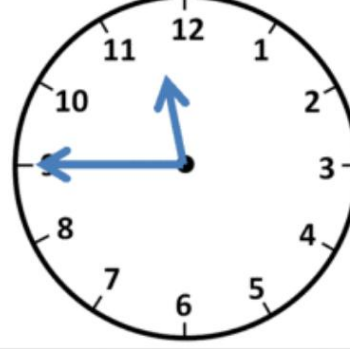
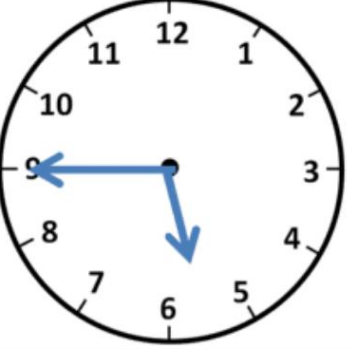
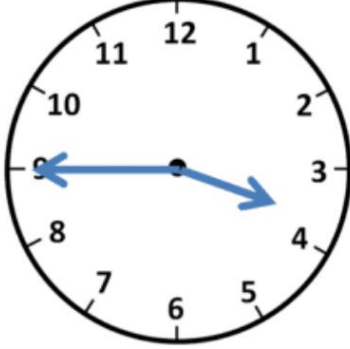
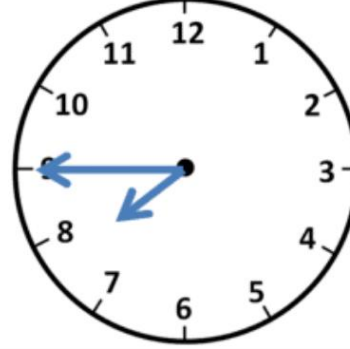
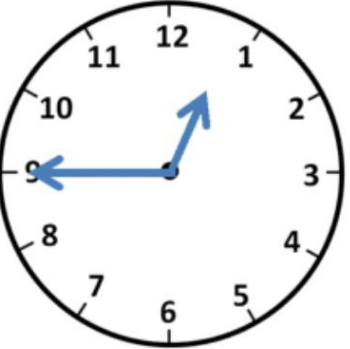
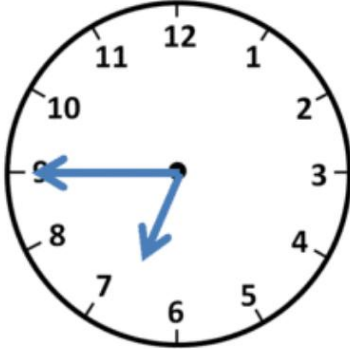
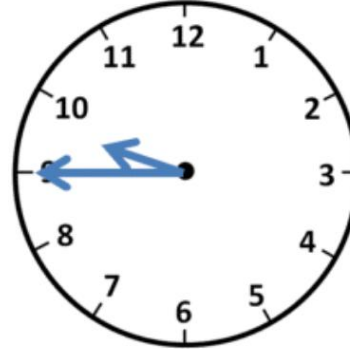
Örnek

		
On biri çeyrek geçiyor çeyrek geçiyor çeyrek geçiyor
		
..... çeyrek geçiyor çeyrek geçiyor çeyrek geçiyor
		
..... çeyrek geçiyor çeyrek geçiyor çeyrek geçiyor

ÇEYREK VAR

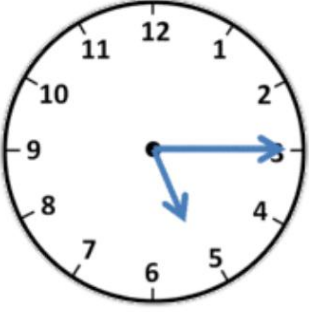
Örneğe göre boşlukları dolduralım

Örnek

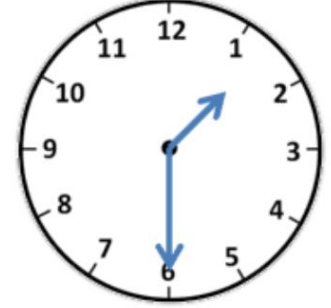
		
Dörde çeyrek var çeyrek var çeyrek var
		
..... çeyrek var çeyrek var çeyrek var
		
..... çeyrek var çeyrek var çeyrek var

HANGİ SAAT ?

Analog saatlerle dijital saatleri eşleştirelim

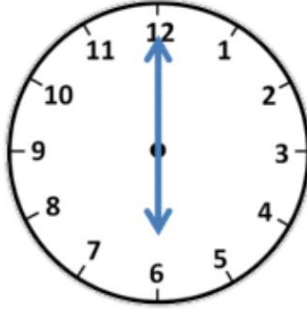


4:45

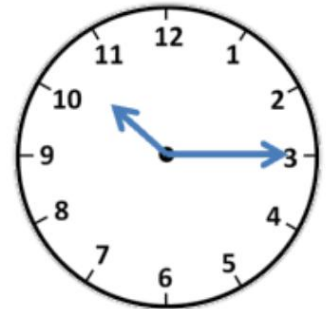


10:15

8:30



5:15



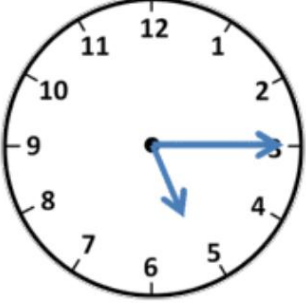
1:30



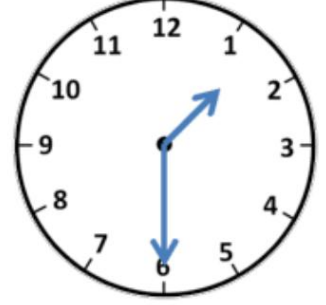
6:00

HANGİ SAAT ?

Saatler ile okunuşlarını eleştir

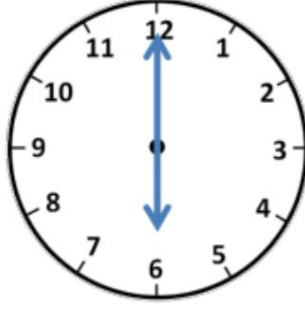


Beşe çeyrek var

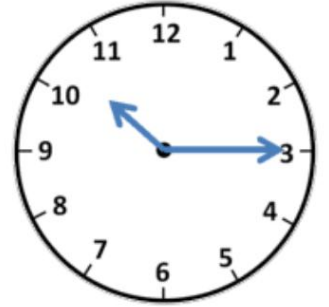


Onu çeyrek geçiyor

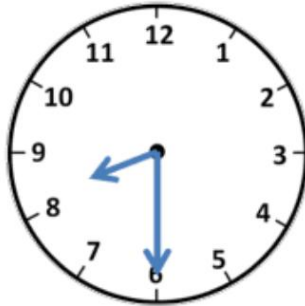
Saat 8 buçuk



Beşi çeyrek geçiyor



Saat bir buçuk



Saat 6

HANGİSİ DOĞRU ?

Örnek



3:15

12:15

12:45



1:15

2:45

2:15



2:45

9:15

3:15



3:45

7:15

7:45



5:45

9:45

6:15



11:45

9:45


12:15



3:45

10:15

10:45



3:15

6:15

3:45



4:45

5:15

5:45



3:45

9:15

3:15