

UZUNLUKLARI ÖLÇME

1. Etkinlik: Aşağıda yapılan ölçüm sonuçlarını yazalım.



Çatal :



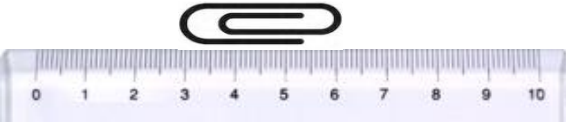
Çiçek :




Mandal :




Bıçak :




Ataç :



Tırtıl :

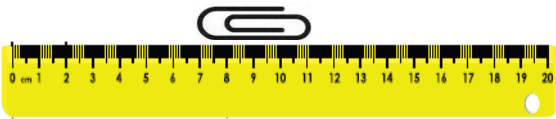


Çivi :

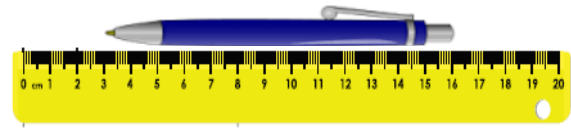


İğne :


2. Etkinlik: Ölçümlere bakarak aşağıda istenilen toplamları bulalım.



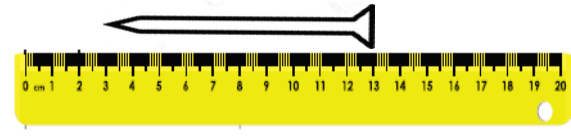
2 tane ataş :



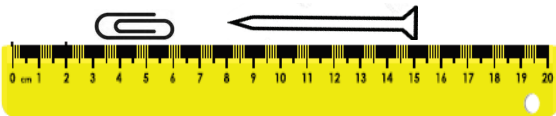
2 tane kalem :



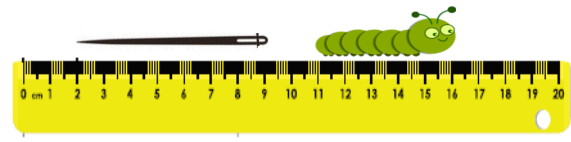
3 tane iğne :



3 tane çivi :



1 ataş + 1 çivi :



1 iğne + 1 tırtıl :