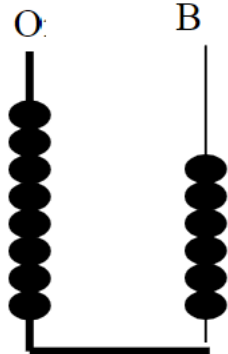
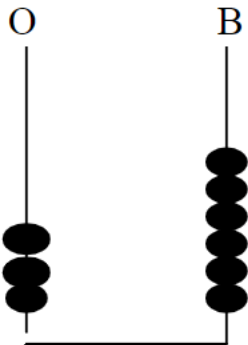
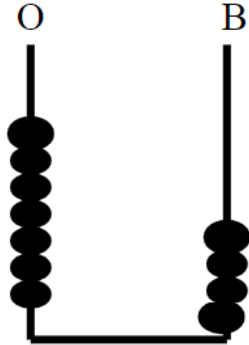
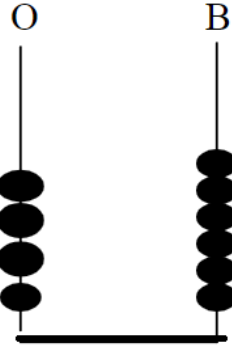
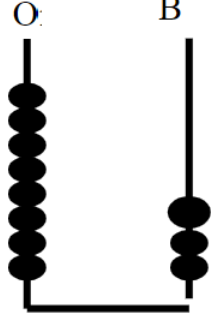
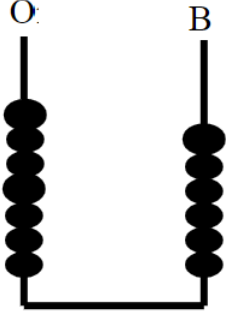



ADI SOYADI:

Abaküle gösterilen sayıları yazalım.




Sayıların basamak adlarını yazalım.

27

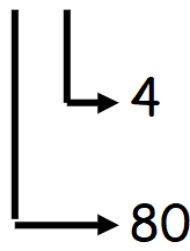


52

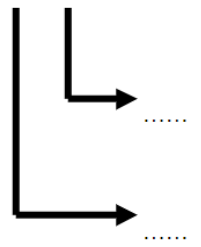


Sayıların basamak değerlerini yazalım.

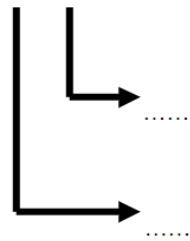
84



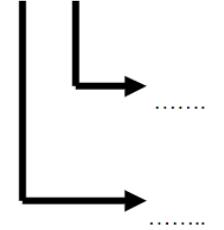
27



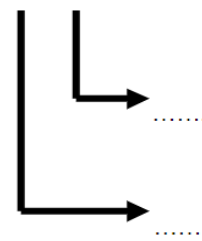
19



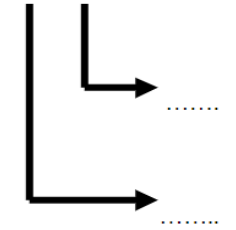
53



70



65



Toplama işlemlerini yapalım.

Kırk sekiz
Otuz dokuz

$$\begin{array}{r} \square \\ \square \\ + \\ \hline \square \end{array}$$

Elli beş
Yirmi dokuz

$$\begin{array}{r} \square \\ \square \\ + \\ \hline \square \end{array}$$

Otuz altı
Altmış

$$\begin{array}{r} \square \\ \square \\ + \\ \hline \square \end{array}$$

Çıkarma işlemlerini yapalım.

2 onluk, 7 birlik
5 onluk, 5 birlik

$$\begin{array}{r} \square \\ \square \\ - \\ \hline \square \end{array}$$

5 onluk, 3 birlik
6 birlik, 3 onluk

$$\begin{array}{r} \square \\ \square \\ - \\ \hline \square \end{array}$$

7 birlik, 6 onluk
1 birlik, 3 onluk

$$\begin{array}{r} \square \\ \square \\ - \\ \hline \square \end{array}$$

Sayıları büyükten küçüğe doğru sıralayalım.

Yetmiş beş
Seksen dört
Altmış üç
Kırk sekiz
Otuz dokuz

Yirmi dokuz
Otuz altı
Altmış altı
Doksan dokuz
Elli yedi

Yanda
çözümlemesi
verilen sayıları
yazalım.

1 birlik, 6 onluktan oluşan sayı kaçtır?

8 birlik, 0 onluktan oluşan sayı kaçtır?

5 onluk, 7 birlikten oluşan sayı kaçtır?

6 birlik, 3 onluktan oluşan sayı kaçtır?