


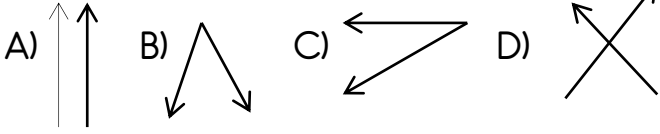
Aşağıdakileri soruları cevaplayınız.

1 Yandaki T açısı aşağıdakilerden Hangisinde doğru gösterilmiştir?

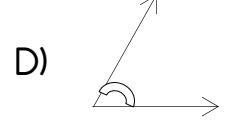
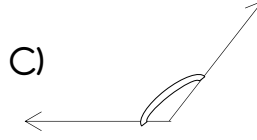
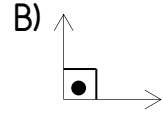
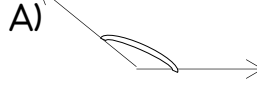


- A) \widehat{M} B) \hat{Z} C) \widehat{ZTM} D) \widehat{TMZ}

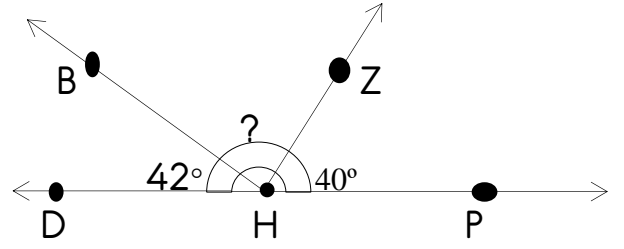
2 Aşağıdakilerden hangisi açı oluşturmaz ?



5 Aşağıdaki açılardan hangisi dar açıdır?



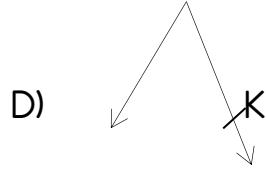
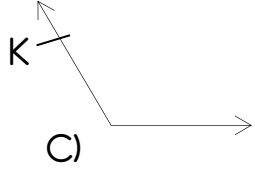
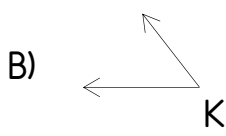
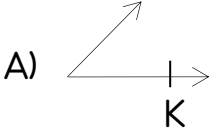
6 Yukarıda verilenlere göre \widehat{BHZ} açısı kaç derecedir?



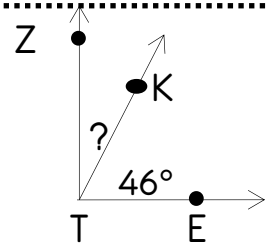
Yukarıda verilenlere göre \widehat{BHZ} açısı kaç derecedir?

- A) 90 B) 98 C) 100 D) 120

3 Aşağıdakilerden hangisi \widehat{K} 'ye aittir?



7

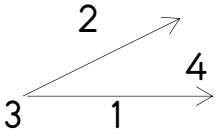


$\widehat{ZTE} = 90^\circ$ $\widehat{KTE} = 46^\circ$ olduğuna

göre \widehat{ZTK} ölçüsü kaç derecedir?

- A) 45 B) 44 C) 90 D) 46

4 Yukarıdaki açının köşesi kaç numara ile gösterilmiştir?



- A) 4 B) 1 C) 3 D) 2