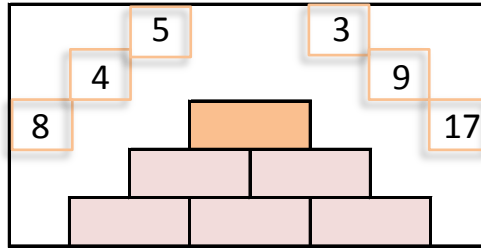
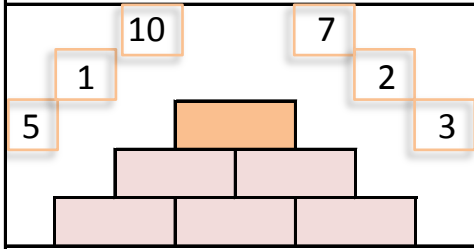
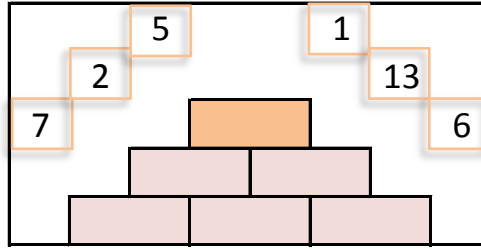
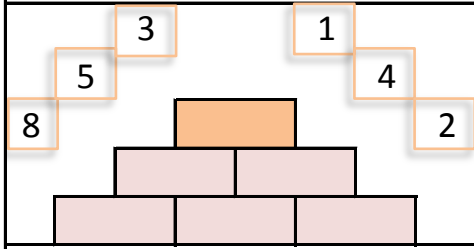


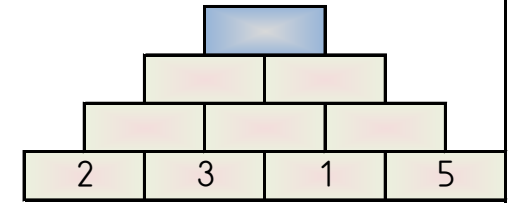
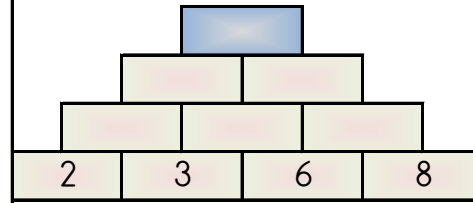
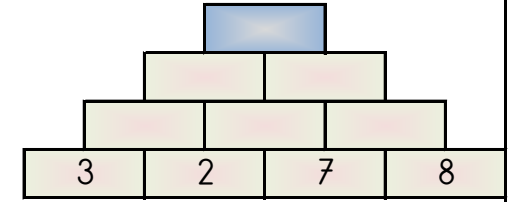
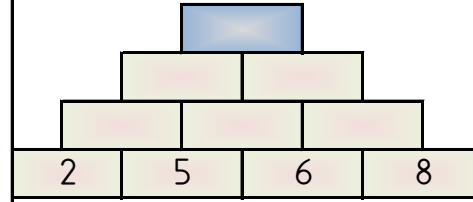
SAYILARI YERLEŞTİR (TOPLAMA PİRAMİDİ)

Toplama piramidi üzerindeki sayılar yerlerinden çıkmış. Sayıları yerlerine yazabilir misiniz?



PİRAMİT TOPLAMA

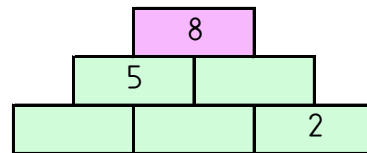
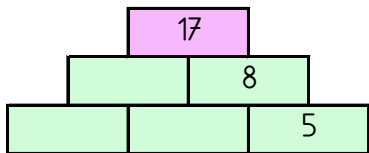
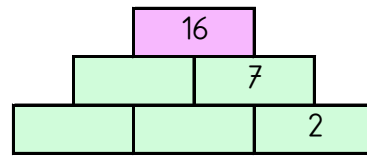
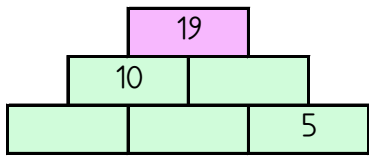
Piramitin altındaki sayıları toplayarak tepedeki sayıya ulaşın ve bu sayıyı işaretleyin.



38 37 43 19 27

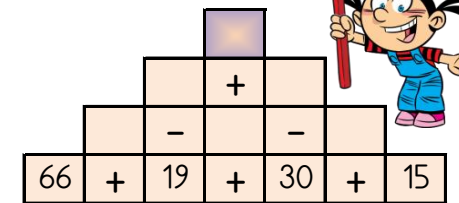
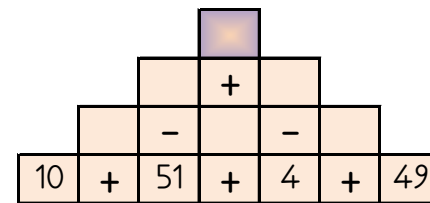
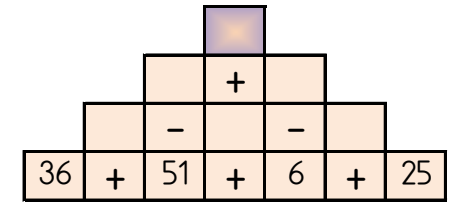
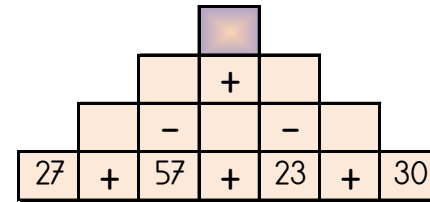
TOPLAMA PİRAMİDİNDE VERİLMEMİYEN SAYILAR

Toplama piramidi üzerinde bazı sayılar verilmemiştir. Bunları bulabilir misin?



PİRAMİT TOPLAMA ÇIKARMA

Sayılar arasındaki işlemleri yaparak piramitin tepesindeki sayıya ulaşın.



8 40 56 67 31

