




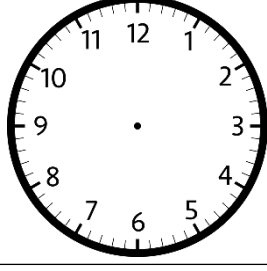
# SAAT KAÇ? - 2



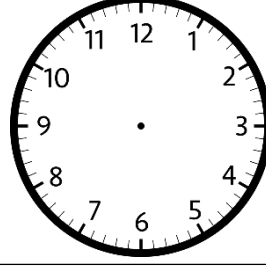
➤ Alt tarafta verilen saatlerin okunuşlarına göre saatlere akrep ve yelkovanları çiziniz.



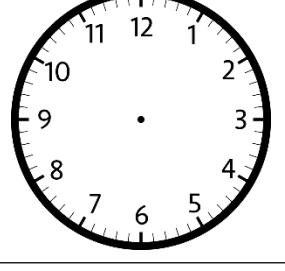
**Saat 9'u çeyrek geçiyor**



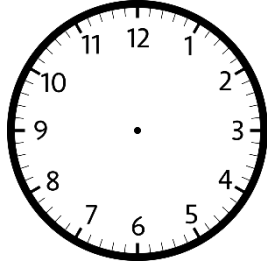
**Saat 12 buçuk**



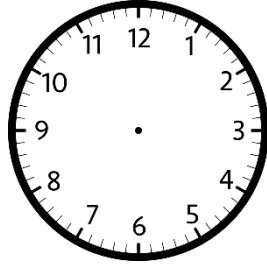
**Saat 1'e çeyrek var**



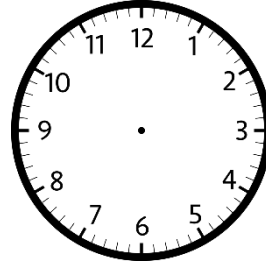
**Saat 7'yi çeyrek geçiyor**



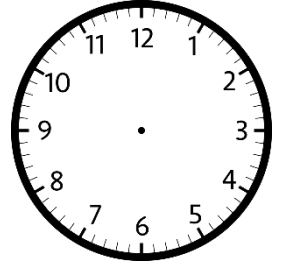
**Saat 6 buçuk**



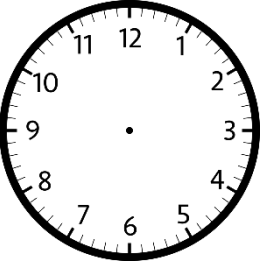
**Saat 5'i çeyrek geçiyor**



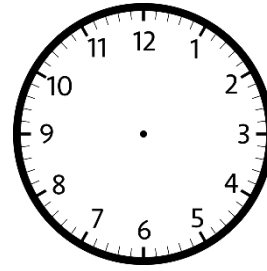
**Saat 2'ye çeyrek var**



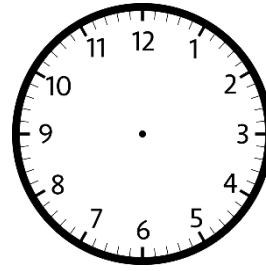
**Saat 3 buçuk**



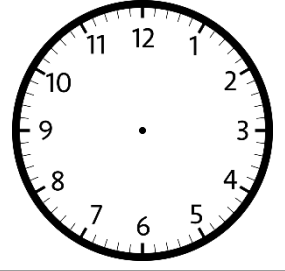
**Saat 11'i çeyrek geçiyor**



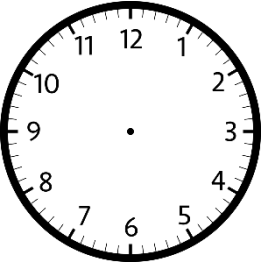
**Saat 8'e çeyrek var**



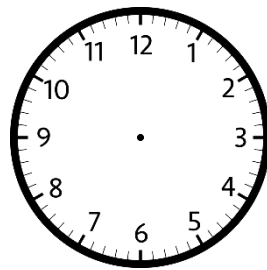
**Saat 6'ya çeyrek var**



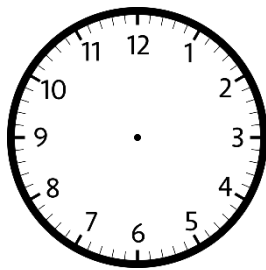
**Saat 1'i çeyrek geçiyor**



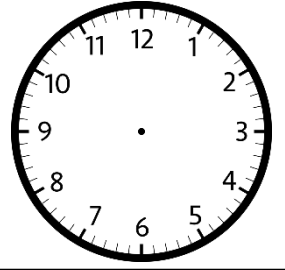
**Saat 9 buçuk**



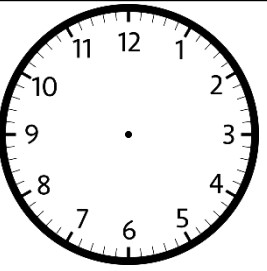
**Saat 2'yi çeyrek geçiyor**



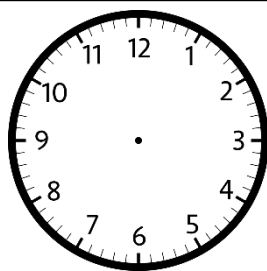
**Saat 10'u çeyrek geçiyor**



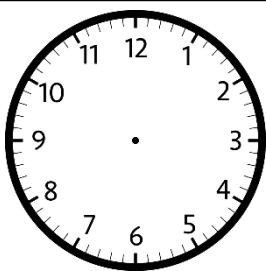
**Saat 10'a çeyrek var**



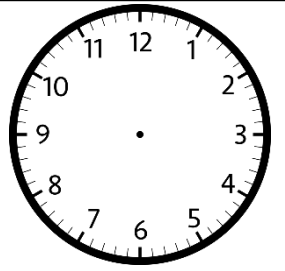
**Saat 5'e çeyrek var**



**Saat 1'ü çeyrek geçiyor**

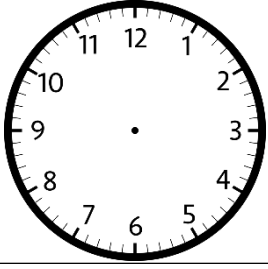


**Saat 8'i çeyrek geçiyor**

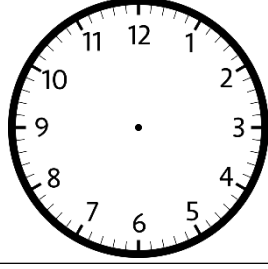


**Saat 7'ye çeyrek var**

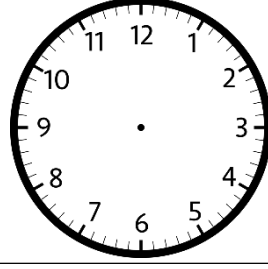
➤ **Alt tarafta verilen saatlere göre akrep ve yelkovanları çiziniz.**



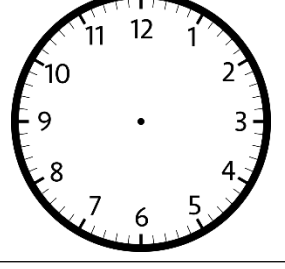
**12.30**



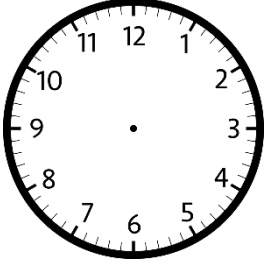
**1.15**



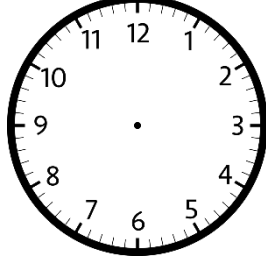
**5.45**



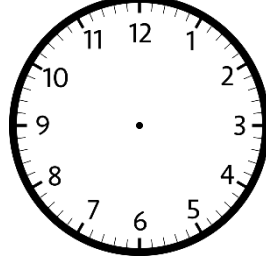
**15.30**



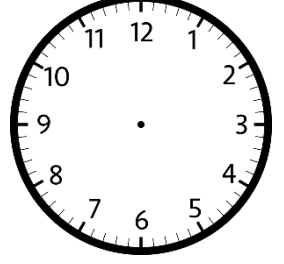
**2.45**



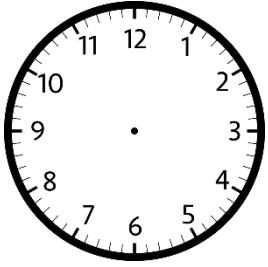
**14.15**



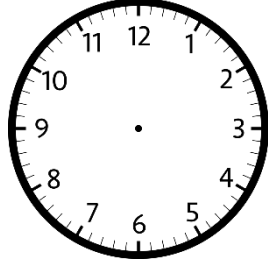
**20.45**



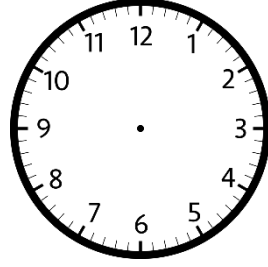
**7.15**



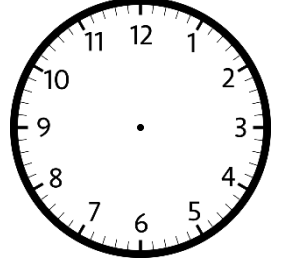
**23.30**



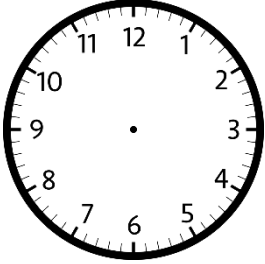
**19.45**



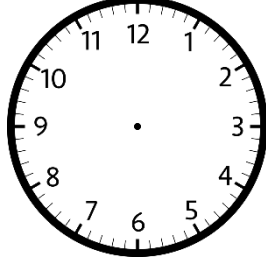
**15.45**



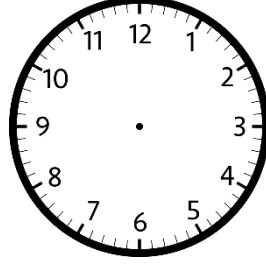
**16.15**



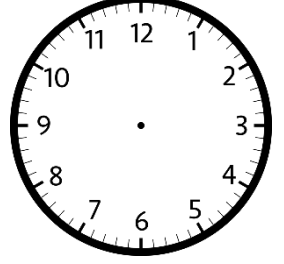
**21.45**



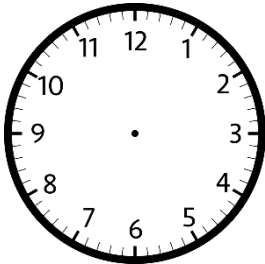
**18.30**



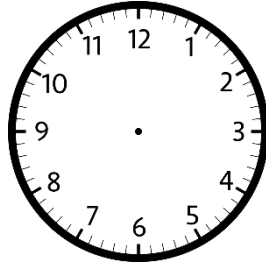
**23.15**



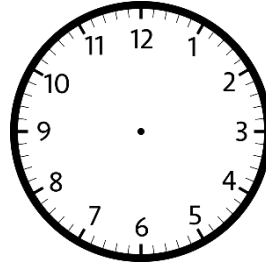
**13.45**



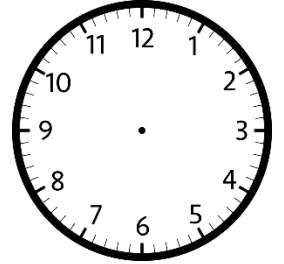
**15.15**



**17.15**



**18.45**



**00.45**

