



### ONLUK BİRLİK ÇALIŞMASI 3



- Aşağıda verilen şekilleri onluk birlik olarak gruplandırarak tabloya yazınız. İskender07



Onluk	Birlik
Sayı:	




Onluk	Birlik
Sayı:	




Onluk	Birlik
Sayı:	



Onluk	Birlik
Sayı:	



Onluk	Birlik
Sayı:	



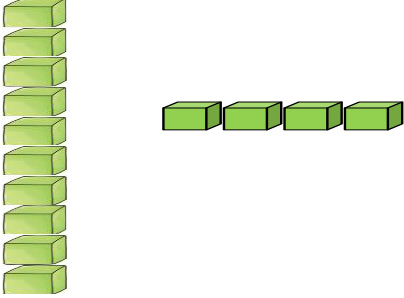
Onluk	Birlik
Sayı:	



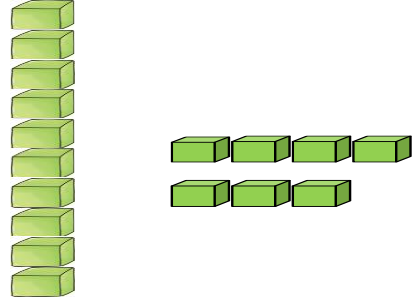
# 1.SINIF MATEMATİK ONLUK BİRLİK ÇALIŞMASI 4



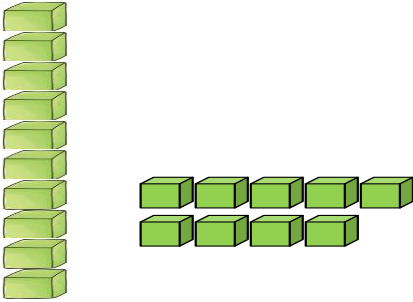
Aşağıda verilen onluk birlik modellerini tabloya uygun doldurunuz.



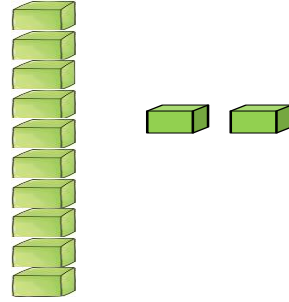
Onluk	Birlik
Sayı:	



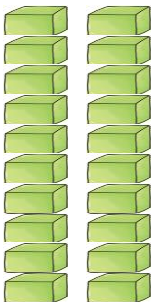
Onluk	Birlik
Sayı:	



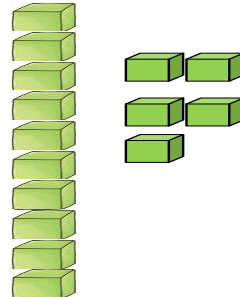
Onluk	Birlik
Sayı:	



Onluk	Birlik
Sayı:	



Onluk	Birlik
Sayı:	



Onluk	Birlik
Sayı:	