

- Aşağıda verilen resimlerin altına "bütün, yarım ve çeyrek" olanlardan uygun olanı yazınız.




.....



.....



.....



.....



.....



.....



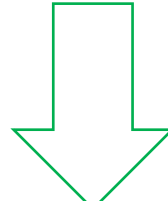
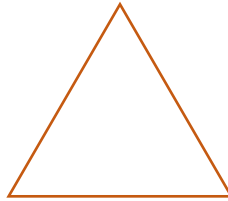

.....



.....




- Aşağıda verilen şekillerin yarısını çizip boyayalım.

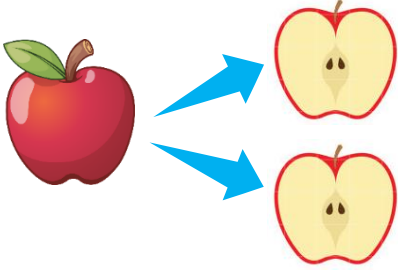
1 bütünün 2 eş parçasından her birine yarım denir.  
Bu nedenle 1 bütün 2 yarım eder.



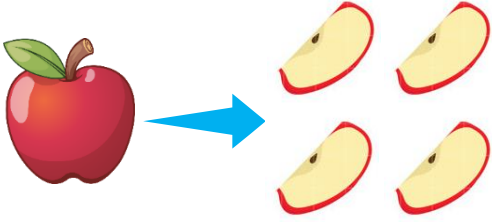
- Aşağıda verilen bilgiye göre şekillerin çeyreğini çizip boyayalım.

1 bütünün 4 eş parçasından her birine çeyrek denir.  
Bu nedenle 1 bütün 4 çeyrek eder.






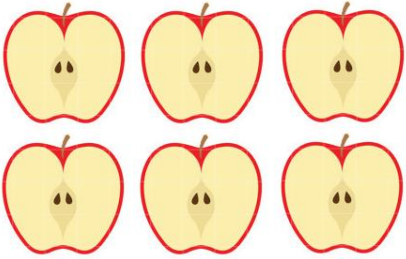
1 bütün elma 2 yarım elma eder.




1 bütün elma 4 çeyrek elma eder.




1 yarım elma 2 çeyrek elma eder.




6 yarım elma ..... bütün elma eder.



3 bütün elma ..... yarım elma eder.



8 çeyrek elma ..... bütün elma eder.



4 yarım elma ..... çeyrek elma eder.