

←←← ÇIKARMA İŞLEMİ →→→

Aşağıdaki çıkarma işlemlerini cevaplayınız

Ağaçta kaç armut var?




Ağaçtan kaç armut düşmüş?



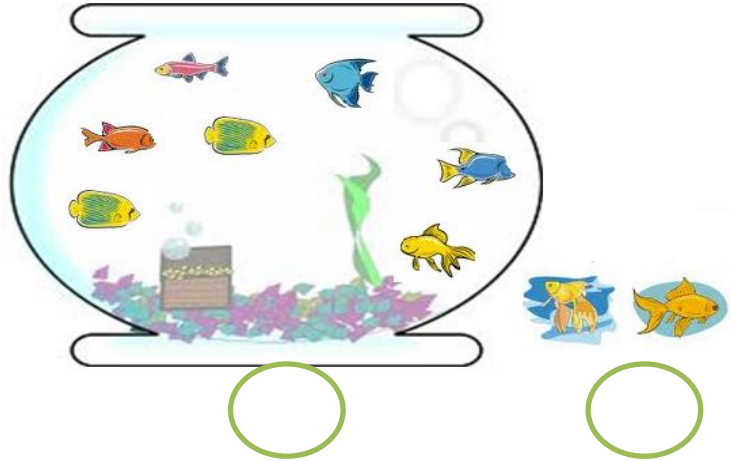
Ağaçta kaç armut kalmış?



Akvaryumda kaç balık




Aşağıda kaç balık kalmış?



Kaç balık akvaryumdan çıkmış?

Kaç balon var?




Kaç balon patladı?

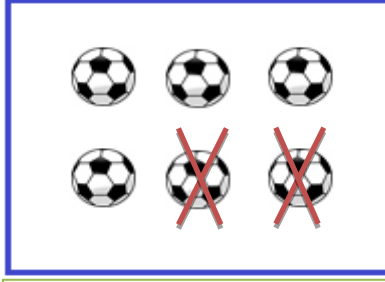


Kaç balon kaldı?

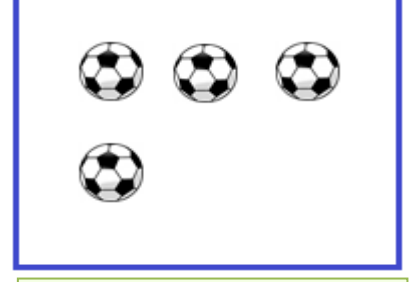
Aşağıdaki çıkarma işlemlerini yapalım ve çıkarma işlemi olarak gösterelim.



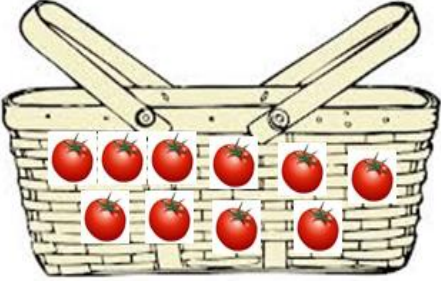
Kaç top var?



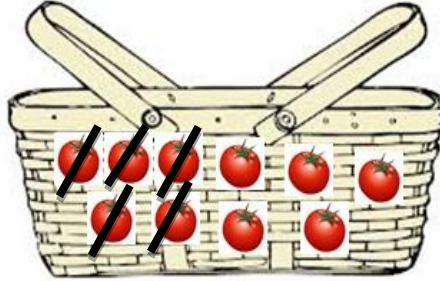
Kaç top patladı?




Kaç top kaldı?




Sepette kaç domates var?




Kaç domates ezildi?




Kaç domates kaldı?



Kümeşte kaç tavuk var?




Kaç tavuk satıldı?



Kaç tavuk kaldı?


Aşağıdaki çıkarma işlemlerini boşlukları doldurarak yapalım



8 cevizden  
**2 ceviz**  
eksildi.  
6 ceviz kaldı

$$8 - 2 = 6$$


8
- 2
—
6



.....  
.....  
.....  
mızdan

$$\bigcirc - \bigcirc = \bigcirc$$

.....
.....
-
.....



.....  
.....  
.....  
almadan

$$\bigcirc - \bigcirc = \bigcirc$$

.....
.....
-
.....

Aşağıdaki çıkarma işlemlerini yapalım.



$$7 - 4 = 3$$

$$\begin{array}{r} 7 \\ \text{-----} \\ 4 \\ \text{-----} \\ - \\ \text{-----} \\ 3 \\ \text{-----} \end{array}$$



$$\bigcirc - \bigcirc = \bigcirc$$

$$\begin{array}{r} \text{-----} \\ \text{-----} \\ - \\ \text{-----} \\ \text{-----} \end{array}$$



$$\bigcirc - \bigcirc = \bigcirc$$

$$\begin{array}{r} \text{-----} \\ \text{-----} \\ - \\ \text{-----} \\ \text{-----} \end{array}$$