



# BÜTÜN VE YARIM ETKİNLİĞİ




Aşağıdaki çalışmaları örnekteki gibi yapar mısınız?




iki bütün domates

Dört tane yarım domates eder.




Üç bütün portakal

..... yarım portakal eder.



Altı bütün pizza

..... yarım pizza eder.



..... bütün limon eder.

Sekiz yarım limon