






ADI SOYADI:

İşlemlerin sonuçlarını yazalım



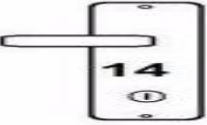
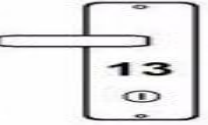
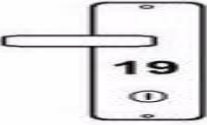
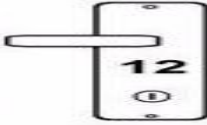
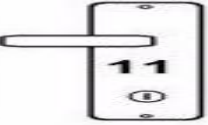






	$2+3=$		$2+9=$
	$2+4=$		$3+4=$
	$2+5=$		$3+5=$
	$2+6=$		$3+6=$
	$2+7=$		$3+7=$
	$2+8=$		$3+8=$

Toplama işlemi sonuçlarını yazalım

	$3+9=$		$5+6=$
	$4+5=$		$5+7=$
	$4+6=$		$5+8=$
	$4+7=$		$5+9=$
	$4+8=$		$6+7=$
	$4+9=$		$6+8=$



İşlemlerle sonuçları eşleştirelim

Toplama işlemi sonuçlarını yazalım

$5+6=$

$9+5=$

$2+1=$

$3+8=$

$7+1=$

$9+9=$

$3+2=$

$7+9=$

$8+8=$

$6+4=$

$6+6=$

$2+5=$

$6+5=$

$5+7=$

$9+1=$

$4+9=$

$9+4=$

$8+4=$

$5+5=$

$9+3=$

$4+1=$

$3+6=$

$4+6=$

$9+4=$



Toplama işlemlerinde üçgenler içine eksik olan sayıları yazalım

