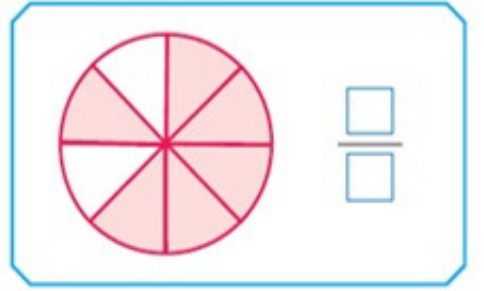
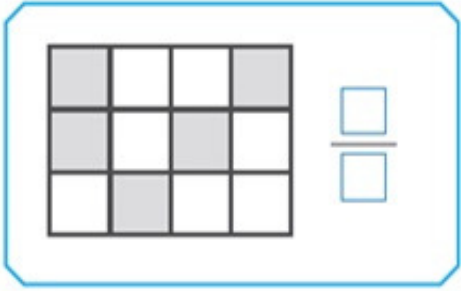
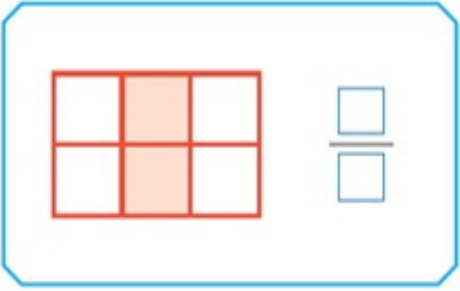
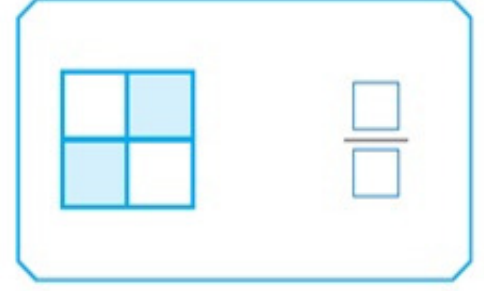
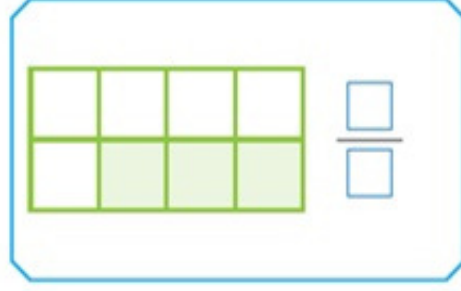
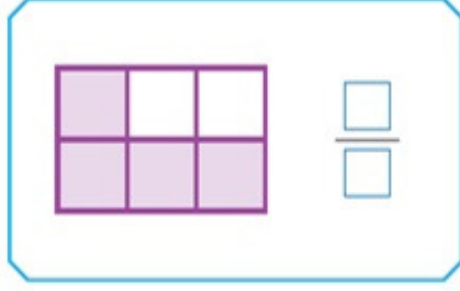
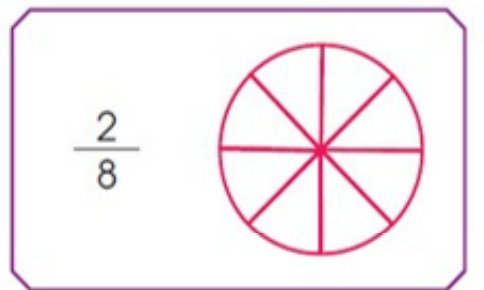
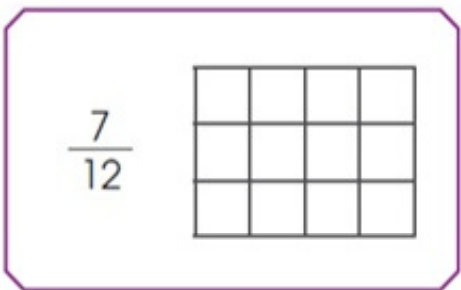
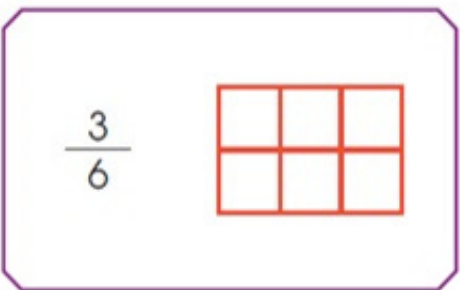
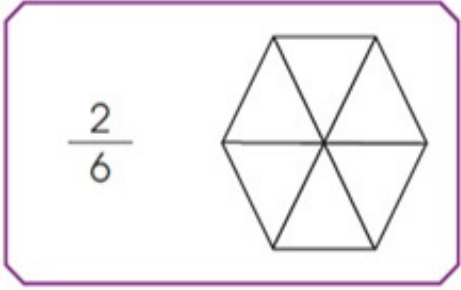

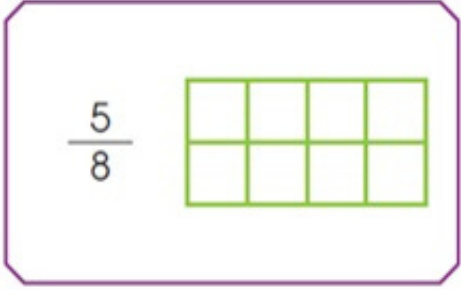
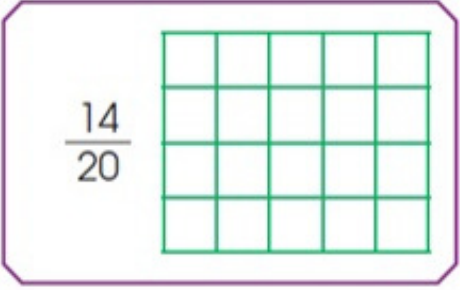


- Payı paydasından küçük olan (Bir bütünden küçük olan) kesirlere **basit kesir** denir.

❁ Aşağıdaki şekillerin boyalı kısımlarını gösteren kesir ifadelerini yazınız.



❁ Aşağıdaki kesir ifadelerine göre şekilleri boyayınız.



❁ Aşağıda verilen kesir modellerini örnekteki gibi kesir sayısı olarak ifade ederek okunuşunu yazınız.

Kesir Modeli

Kesir Sayısı

Okunuşu

Okunuşu




$$\frac{4}{8}$$

Sekizde dört



Dört bölü sekiz




$$\frac{\square}{\square}$$

.....



.....



$$\frac{\square}{\square}$$

.....



.....



$$\frac{\square}{\square}$$

.....



.....



$$\frac{\square}{\square}$$

.....



.....

❁ Aşağıda verilen kesirlerin örnekteki gibi okunuşlarını yazarak modelle gösteriniz.

Kesir Sayısı

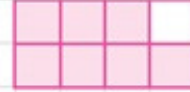
Okunuşu

Kesir Modeli

$$\frac{7}{8}$$



Sekizde yedi



$$\frac{9}{10}$$



.....



$$\frac{6}{8}$$



.....



$$\frac{4}{7}$$



.....



$$\frac{2}{3}$$



.....

